

Group Members _____

Lesson 5.5 – Inequalities on One Variable Group Quiz

1a) _____

1b) _____

1c) _____

1d) _____

1e) _____

1f) _____

2a) _____, _____, _____

3a) _____

4a) _____

2b) _____, _____, _____

3b) _____

4b) _____

2c) _____, _____, _____

3c) _____

4c) _____

2d) _____, _____, _____

3d) _____

4d) _____

2e) _____, _____, _____

3e) _____

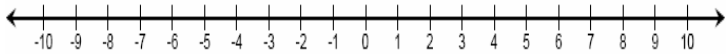
2f) _____, _____, _____

3f) _____

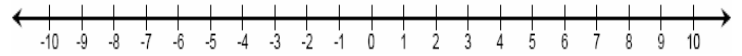
For question 5, solve each inequality for x showing your work properly. Then graph the solution on the number line given.

5a) .

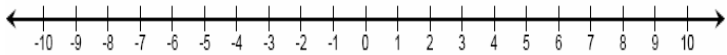
5b) .



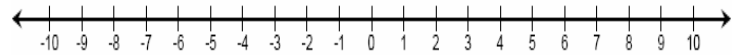
5c) .



5d) .



5e) .



5f) .

